

Ik lees en teken de temperaturen

1 Kijk naar de thermometer en kleur die juist in.

Doe dit 's ochtends (bovenaan) en 's middags (onderaan).

Schrijf er de graden onder.

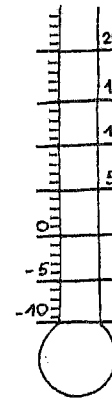
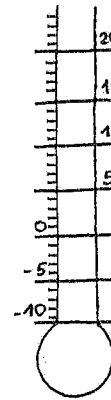
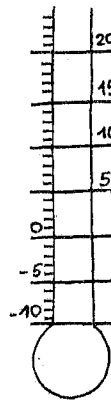
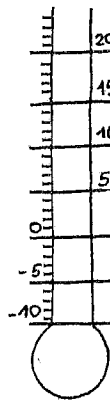
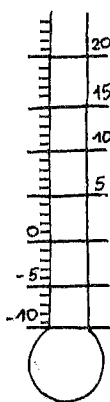
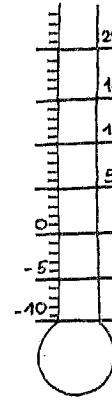
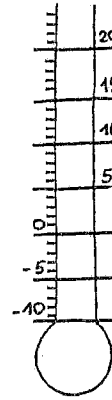
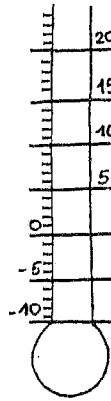
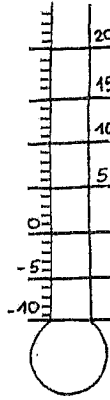
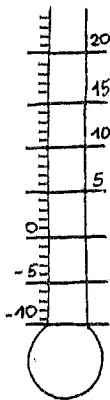
MAANDAG

DINSDAG

WOENSDAG

DONDERDAG

VRIJDAG



2 Verbind de ochtendtemperaturen met elkaar.
Doe dit ook voor de middagtemperaturen.

Wat merk je?
